

**МИНИСТЕРСТВО**  
**ПРОСВЕЩЕНИЯ**  
**РЕСПУБЛИКИ МОЛДОВА**

**АГЕНТСТВО**  
**ПО ОБЕСПЕЧЕНИЮ**  
**КАЧЕСТВА**

Фамилия: \_\_\_\_\_

Имя: \_\_\_\_\_

Учебное заведение: \_\_\_\_\_

М

Д

**МАТЕМАТИКА**

*ИТОГОВОЕ ОЦЕНИВАНИЕ РЕЗУЛЬТАТОВ ОБУЧЕНИЯ  
В НАЧАЛЬНОМ ОБРАЗОВАНИИ*

19 мая 2015 года

Время выполнения: **60 минут**

Необходимые материалы: **ручка, заправленная пастой синего цвета, линейка.**


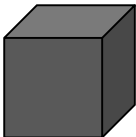

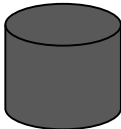
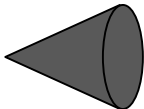


Памятка для ученика:

- Запиши фамилию и имя в специально отведённый квадратик.
- Прочитай внимательно текст и аккуратно выполни предложенные задания.
- Работай самостоятельно.
- Используй эффективно время, отведённое для выполнения теста.

***Желаем успеха!***

Фамилия и имя проверяющего: \_\_\_\_\_ Количество баллов \_\_\_\_\_

Оценка \_\_\_\_\_

1.	<p>Какое из данных чисел составлено из 2 десятков тысяч и 2 десятков? Обведи букву, соответствующую верному ответу.</p> <p><b>A.</b> 22 000                    <b>B.</b> 20 200                    <b>C.</b> 20 002                    <b>D.</b> 20 020</p>	L_ ( )
2.	<p>Какое из данных чисел наибольшее? Обведи букву, соответствующую верному ответу.</p> <p><b>A.</b> 30 663                    <b>B.</b> 36 630                    <b>C.</b> 3 636                    <b>D.</b> 36 603</p>	L_ ( )
3.	<p>Рассмотри пример: <math>2 \times (16 + 24 : 4) =</math></p> <p>В каком порядке нужно выполнить действия в этом примере? Обведи букву, соответствующую верному ответу.</p> <p> <math>\overset{1)}{A.} \ 2 \times (16 + 24 : 4)</math>                    <math>\overset{3)}{C.} \ 2 \times (16 + 24 : 4)</math>  <math>\overset{2)}{B.} \ 2 \times (16 + 24 : 4)</math>                    <math>\overset{3)}{D.} \ 2 \times (16 + 24 : 4)</math> </p>	L_ ( )
4.	<p>Подчеркни верно решённые примеры.</p> <p><math>8 \times 0 \times 1 = 0</math>                    <math>8 : 0 = 0</math>                    <math>2 : 8 = 0, \text{ ост. } 2</math>                    <math>\frac{1}{3} \text{ от } 24 = 8</math></p>	L0123
5.	<p>Укажи стрелкой геометрическую форму, соответствующую каждому названию.</p> <p><b>параллелепипед</b>                    <b>квадрат</b>                    <b>сфера</b>                    <b>цилиндр</b>                    <b>конус</b></p> <p>        </p>	L012345

6.	<p>Прочитай каждое утверждение. Обведи букву <b>И</b>, если считаешь утверждение истинным, а если считаешь его ложным, обведи букву <b>Л</b>.</p> <ul style="list-style-type: none"> <li>• <i>В високосном году 366 дней.</i> <b>И Л</b></li> <li>• <i>Четверть часа содержит 20 минут.</i> <b>И Л</b></li> <li>• <i>Толщину книги можно выразить в граммах.</i> <b>И Л</b></li> <li>• <i>Массу ведра с водой можно измерить с помощью весов.</i> <b>И Л</b></li> </ul>	L01 L01 L01 L01																																																																																																																																																																																																																			
7.	<p>Вычисли в столбик.</p> <table style="width: 100%; border-collapse: collapse;"> <tr> <td style="width: 50%; border-collapse: collapse;"> <table style="width: 100%; border-collapse: collapse;"> <tr><td style="border: 1px solid black; width: 20px; height: 20px;"></td><td style="border: 1px solid black; width: 20px; height: 20px;"></td><td style="border: 1px solid black; width: 20px; height: 20px;"></td><td style="border: 1px solid black; width: 20px; height: 20px;"></td><td style="border: 1px solid black; width: 20px; height: 20px;"></td><td style="border: 1px solid black; width: 20px; height: 20px;"></td><td style="border: 1px solid black; width: 20px; height: 20px;"></td><td style="border: 1px solid black; width: 20px; height: 20px;"></td></tr> <tr><td style="border: 1px solid black; text-align: center;">7</td><td style="border: 1px solid black; text-align: center;">9</td><td style="border: 1px solid black; text-align: center;">6</td><td style="border: 1px solid black; text-align: center;">5</td><td style="border: 1px solid black; text-align: center;">8</td><td style="border: 1px solid black; text-align: center;">+</td><td style="border: 1px solid black; width: 20px; height: 20px;"></td><td style="border: 1px solid black; width: 20px; height: 20px;"></td></tr> <tr><td style="border: 1px solid black; text-align: center;">2</td><td style="border: 1px solid black; text-align: center;">0</td><td style="border: 1px solid black; text-align: center;">3</td><td style="border: 1px solid black; text-align: center;">5</td><td style="border: 1px solid black; text-align: center;">7</td><td style="border: 1px solid black;"></td><td style="border: 1px solid black;"></td><td style="border: 1px solid black;"></td></tr> <tr><td style="border: 1px solid black;"></td><td style="border: 1px solid black;"></td><td style="border: 1px solid black;"></td><td style="border: 1px solid black;"></td><td style="border: 1px solid black;"></td><td style="border: 1px solid black;"></td><td style="border: 1px solid black;"></td><td style="border: 1px solid black;"></td></tr> <tr><td style="border: 1px solid black;"></td><td style="border: 1px solid black;"></td><td style="border: 1px solid black;"></td><td style="border: 1px solid black;"></td><td style="border: 1px solid black;"></td><td style="border: 1px solid black;"></td><td style="border: 1px solid black;"></td><td style="border: 1px solid black;"></td></tr> </table>   <table style="width: 100%; border-collapse: collapse;"> <tr><td style="border: 1px solid black; width: 20px; height: 20px;"></td><td style="border: 1px solid black; width: 20px; height: 20px;"></td><td style="border: 1px solid black; width: 20px; height: 20px;"></td><td style="border: 1px solid black; width: 20px; height: 20px;"></td><td style="border: 1px solid black; width: 20px; height: 20px;"></td><td style="border: 1px solid black; width: 20px; height: 20px;"></td><td style="border: 1px solid black; width: 20px; height: 20px;"></td><td style="border: 1px solid black; width: 20px; height: 20px;"></td></tr> <tr><td style="border: 1px solid black; text-align: center;">1</td><td style="border: 1px solid black; text-align: center;">0</td><td style="border: 1px solid black; text-align: center;">1</td><td style="border: 1px solid black; text-align: center;">0</td><td style="border: 1px solid black; text-align: center;">0</td><td style="border: 1px solid black; text-align: center;">−</td><td style="border: 1px solid black; width: 20px; height: 20px;"></td><td style="border: 1px solid black; width: 20px; height: 20px;"></td></tr> <tr><td style="border: 1px solid black; text-align: center;">9</td><td style="border: 1px solid black; text-align: center;">5</td><td style="border: 1px solid black; text-align: center;">0</td><td style="border: 1px solid black; text-align: center;">3</td><td style="border: 1px solid black;"></td><td style="border: 1px solid black;"></td><td style="border: 1px solid black;"></td><td style="border: 1px solid black;"></td></tr> <tr><td style="border: 1px solid black;"></td><td style="border: 1px solid black;"></td><td style="border: 1px solid black;"></td><td style="border: 1px solid black;"></td><td style="border: 1px solid black;"></td><td style="border: 1px solid black;"></td><td style="border: 1px solid black;"></td><td style="border: 1px solid black;"></td></tr> <tr><td style="border: 1px solid black;"></td><td style="border: 1px solid black;"></td><td style="border: 1px solid black;"></td><td style="border: 1px solid black;"></td><td style="border: 1px solid black;"></td><td style="border: 1px solid black;"></td><td style="border: 1px solid black;"></td><td style="border: 1px solid black;"></td></tr> </table> </td> <td style="width: 50%; border-collapse: collapse;"> <table style="width: 100%; border-collapse: collapse;"> <tr><td style="border: 1px solid black; width: 20px; height: 20px;"></td><td style="border: 1px solid black; width: 20px; height: 20px;"></td><td style="border: 1px solid black; width: 20px; height: 20px;"></td><td style="border: 1px solid black; width: 20px; height: 20px;"></td><td style="border: 1px solid black; width: 20px; height: 20px;"></td><td style="border: 1px solid black; width: 20px; height: 20px;"></td><td style="border: 1px solid black; width: 20px; height: 20px;"></td><td style="border: 1px solid black; width: 20px; height: 20px;"></td></tr> <tr><td style="border: 1px solid black; text-align: center;">8</td><td style="border: 1px solid black; text-align: center;">0</td><td style="border: 1px solid black; text-align: center;">7</td><td style="border: 1px solid black; text-align: center;">5</td><td style="border: 1px solid black; text-align: center;">×</td><td style="border: 1px solid black; width: 20px; height: 20px;"></td><td style="border: 1px solid black; width: 20px; height: 20px;"></td><td style="border: 1px solid black; width: 20px; height: 20px;"></td></tr> <tr><td style="border: 1px solid black;"></td><td style="border: 1px solid black;"></td><td style="border: 1px solid black;"></td><td style="border: 1px solid black; text-align: center;">4</td><td style="border: 1px solid black;"></td><td style="border: 1px solid black;"></td><td style="border: 1px solid black;"></td><td style="border: 1px solid black;"></td></tr> <tr><td style="border: 1px solid black;"></td><td style="border: 1px solid black;"></td><td style="border: 1px solid black;"></td><td style="border: 1px solid black;"></td><td style="border: 1px solid black;"></td><td style="border: 1px solid black;"></td><td style="border: 1px solid black;"></td><td style="border: 1px solid black;"></td></tr> <tr><td style="border: 1px solid black;"></td><td style="border: 1px solid black;"></td><td style="border: 1px solid black;"></td><td style="border: 1px solid black;"></td><td style="border: 1px solid black;"></td><td style="border: 1px solid black;"></td><td style="border: 1px solid black;"></td><td style="border: 1px solid black;"></td></tr> </table>   <table style="width: 100%; border-collapse: collapse;"> <tr><td style="border: 1px solid black; width: 20px; height: 20px;"></td><td style="border: 1px solid black; width: 20px; height: 20px;"></td><td style="border: 1px solid black; width: 20px; height: 20px;"></td><td style="border: 1px solid black; width: 20px; height: 20px;"></td><td style="border: 1px solid black; width: 20px; height: 20px;"></td><td style="border: 1px solid black; width: 20px; height: 20px;"></td><td style="border: 1px solid black; width: 20px; height: 20px;"></td><td style="border: 1px solid black; width: 20px; height: 20px;"></td></tr> <tr><td style="border: 1px solid black; text-align: center;">2</td><td style="border: 1px solid black; text-align: center;">0</td><td style="border: 1px solid black; text-align: center;">0</td><td style="border: 1px solid black; text-align: center;">5</td><td style="border: 1px solid black; text-align: center;">0</td><td style="border: 1px solid black; text-align: center;">8</td><td style="border: 1px solid black; width: 20px; height: 20px;"></td><td style="border: 1px solid black; width: 20px; height: 20px;"></td></tr> <tr><td style="border: 1px solid black;"></td><td style="border: 1px solid black;"></td><td style="border: 1px solid black;"></td><td style="border: 1px solid black;"></td><td style="border: 1px solid black;"></td><td style="border: 1px solid black;"></td><td style="border: 1px solid black;"></td><td style="border: 1px solid black;"></td></tr> <tr><td style="border: 1px solid black;"></td><td style="border: 1px solid black;"></td><td style="border: 1px solid black;"></td><td style="border: 1px solid black;"></td><td style="border: 1px solid black;"></td><td style="border: 1px solid black;"></td><td style="border: 1px solid black;"></td><td style="border: 1px solid black;"></td></tr> <tr><td style="border: 1px solid black;"></td><td style="border: 1px solid black;"></td><td style="border: 1px solid black;"></td><td style="border: 1px solid black;"></td><td style="border: 1px solid black;"></td><td style="border: 1px solid black;"></td><td style="border: 1px solid black;"></td><td style="border: 1px solid black;"></td></tr> <tr><td style="border: 1px solid black;"></td><td style="border: 1px solid black;"></td><td style="border: 1px solid black;"></td><td style="border: 1px solid black;"></td><td style="border: 1px solid black;"></td><td style="border: 1px solid black;"></td><td style="border: 1px solid black;"></td><td style="border: 1px solid black;"></td></tr> <tr><td style="border: 1px solid black;"></td><td style="border: 1px solid black;"></td><td style="border: 1px solid black;"></td><td style="border: 1px solid black;"></td><td style="border: 1px solid black;"></td><td style="border: 1px solid black;"></td><td style="border: 1px solid black;"></td><td style="border: 1px solid black;"></td></tr> <tr><td style="border: 1px solid black;"></td><td style="border: 1px solid black;"></td><td style="border: 1px solid black;"></td><td style="border: 1px solid black;"></td><td style="border: 1px solid black;"></td><td style="border: 1px solid black;"></td><td style="border: 1px solid black;"></td><td style="border: 1px solid black;"></td></tr> <tr><td style="border: 1px solid black;"></td><td style="border: 1px solid black;"></td><td style="border: 1px solid black;"></td><td style="border: 1px solid black;"></td><td style="border: 1px solid black;"></td><td style="border: 1px solid black;"></td><td style="border: 1px solid black;"></td><td style="border: 1px solid black;"></td></tr> </table> </td> <td data-bbox="1364 566 1520 1406">L01 L01  L01 L01</td> </tr> <tr> <td data-bbox="76 1406 151 1619">8.</td> <td data-bbox="151 1406 1364 1619"> <p>Впиши пропущенные числа.</p> <table style="width: 100%; border-collapse: collapse;"> <tr> <td style="border: 1px solid black; width: 100px; height: 30px;"></td> <td style="padding: 0 10px;">− 50 = 19 950</td> <td style="border-left: 1px solid black; padding: 0 10px;">500 +</td> <td style="border: 1px solid black; width: 100px; height: 30px;"></td> <td style="padding: 0 10px;">= 500 000</td> <td style="border-left: 1px solid black; padding: 0 10px;">:</td> <td style="border: 1px solid black; width: 100px; height: 30px;"></td> <td style="padding: 0 10px;">= 407</td> </tr> </table> </td> <td data-bbox="1364 1406 1520 1619">L02 L02 L02</td> </tr> <tr> <td data-bbox="76 1619 151 1783">9.</td> <td data-bbox="151 1619 1364 1783"> <p>Выяви правило составления ряда. Впиши последующее число.</p> <p>4 040, 2 020, 1 010, <span style="border: 1px solid black; display: inline-block; width: 50px; height: 20px; vertical-align: middle;"></span>.</p> </td> <td data-bbox="1364 1619 1520 1783">L02</td> </tr> <tr> <td data-bbox="76 1783 151 2121">10.</td> <td data-bbox="151 1783 1364 2121"> <p>Сравни. Поставь нужный знак сравнения (&lt;, =, &gt;).</p> <p>1 см ○ 100 мм                      1 мин ○ 100 сек</p> <p>1 км ○ 100 м                                      1 т ○ 100 кг</p> </td> <td data-bbox="1364 1783 1520 2121">L01 L01 L01 L01</td> </tr> </table>	<table style="width: 100%; border-collapse: collapse;"> <tr><td style="border: 1px solid black; width: 20px; height: 20px;"></td><td style="border: 1px solid black; width: 20px; height: 20px;"></td><td style="border: 1px solid black; width: 20px; height: 20px;"></td><td style="border: 1px solid black; width: 20px; height: 20px;"></td><td style="border: 1px solid black; width: 20px; height: 20px;"></td><td style="border: 1px solid black; width: 20px; height: 20px;"></td><td style="border: 1px solid black; width: 20px; height: 20px;"></td><td style="border: 1px solid black; width: 20px; height: 20px;"></td></tr> <tr><td style="border: 1px solid black; text-align: center;">7</td><td style="border: 1px solid black; text-align: center;">9</td><td style="border: 1px solid black; text-align: center;">6</td><td style="border: 1px solid black; text-align: center;">5</td><td style="border: 1px solid black; text-align: center;">8</td><td style="border: 1px solid black; text-align: center;">+</td><td style="border: 1px solid black; width: 20px; height: 20px;"></td><td style="border: 1px solid black; width: 20px; height: 20px;"></td></tr> <tr><td style="border: 1px solid black; text-align: center;">2</td><td style="border: 1px solid black; text-align: center;">0</td><td style="border: 1px solid black; text-align: center;">3</td><td style="border: 1px solid black; text-align: center;">5</td><td style="border: 1px solid black; text-align: center;">7</td><td style="border: 1px solid black;"></td><td style="border: 1px solid black;"></td><td style="border: 1px solid black;"></td></tr> <tr><td style="border: 1px solid black;"></td><td style="border: 1px solid black;"></td><td style="border: 1px solid black;"></td><td style="border: 1px solid black;"></td><td style="border: 1px solid black;"></td><td style="border: 1px solid black;"></td><td style="border: 1px solid black;"></td><td style="border: 1px solid black;"></td></tr> <tr><td style="border: 1px solid black;"></td><td style="border: 1px solid black;"></td><td style="border: 1px solid black;"></td><td style="border: 1px solid black;"></td><td style="border: 1px solid black;"></td><td style="border: 1px solid black;"></td><td style="border: 1px solid black;"></td><td style="border: 1px solid black;"></td></tr> </table> <table style="width: 100%; border-collapse: collapse;"> <tr><td style="border: 1px solid black; width: 20px; height: 20px;"></td><td style="border: 1px solid black; width: 20px; height: 20px;"></td><td style="border: 1px solid black; width: 20px; height: 20px;"></td><td style="border: 1px solid black; width: 20px; height: 20px;"></td><td style="border: 1px solid black; width: 20px; height: 20px;"></td><td style="border: 1px solid black; width: 20px; height: 20px;"></td><td style="border: 1px solid black; width: 20px; height: 20px;"></td><td style="border: 1px solid black; width: 20px; height: 20px;"></td></tr> <tr><td style="border: 1px solid black; text-align: center;">1</td><td style="border: 1px solid black; text-align: center;">0</td><td style="border: 1px solid black; text-align: center;">1</td><td style="border: 1px solid black; text-align: center;">0</td><td style="border: 1px solid black; text-align: center;">0</td><td style="border: 1px solid black; text-align: center;">−</td><td style="border: 1px solid black; width: 20px; height: 20px;"></td><td style="border: 1px solid black; width: 20px; height: 20px;"></td></tr> <tr><td style="border: 1px solid black; text-align: center;">9</td><td style="border: 1px solid black; text-align: center;">5</td><td style="border: 1px solid black; text-align: center;">0</td><td style="border: 1px solid black; text-align: center;">3</td><td style="border: 1px solid black;"></td><td style="border: 1px solid black;"></td><td style="border: 1px solid black;"></td><td style="border: 1px solid black;"></td></tr> <tr><td style="border: 1px solid black;"></td><td style="border: 1px solid black;"></td><td style="border: 1px solid black;"></td><td style="border: 1px solid black;"></td><td style="border: 1px solid black;"></td><td style="border: 1px solid black;"></td><td style="border: 1px solid black;"></td><td style="border: 1px solid black;"></td></tr> <tr><td style="border: 1px solid black;"></td><td style="border: 1px solid black;"></td><td style="border: 1px solid black;"></td><td style="border: 1px solid black;"></td><td style="border: 1px solid black;"></td><td style="border: 1px solid black;"></td><td style="border: 1px solid black;"></td><td style="border: 1px solid black;"></td></tr> </table>									7	9	6	5	8	+			2	0	3	5	7																												1	0	1	0	0	−			9	5	0	3																					<table style="width: 100%; border-collapse: collapse;"> <tr><td style="border: 1px solid black; width: 20px; height: 20px;"></td><td style="border: 1px solid black; width: 20px; height: 20px;"></td><td style="border: 1px solid black; width: 20px; height: 20px;"></td><td style="border: 1px solid black; width: 20px; height: 20px;"></td><td style="border: 1px solid black; width: 20px; height: 20px;"></td><td style="border: 1px solid black; width: 20px; height: 20px;"></td><td style="border: 1px solid black; width: 20px; height: 20px;"></td><td style="border: 1px solid black; width: 20px; height: 20px;"></td></tr> <tr><td style="border: 1px solid black; text-align: center;">8</td><td style="border: 1px solid black; text-align: center;">0</td><td style="border: 1px solid black; text-align: center;">7</td><td style="border: 1px solid black; text-align: center;">5</td><td style="border: 1px solid black; text-align: center;">×</td><td style="border: 1px solid black; width: 20px; height: 20px;"></td><td style="border: 1px solid black; width: 20px; height: 20px;"></td><td style="border: 1px solid black; width: 20px; height: 20px;"></td></tr> <tr><td style="border: 1px solid black;"></td><td style="border: 1px solid black;"></td><td style="border: 1px solid black;"></td><td style="border: 1px solid black; text-align: center;">4</td><td style="border: 1px solid black;"></td><td style="border: 1px solid black;"></td><td style="border: 1px solid black;"></td><td style="border: 1px solid black;"></td></tr> <tr><td style="border: 1px solid black;"></td><td style="border: 1px solid black;"></td><td style="border: 1px solid black;"></td><td style="border: 1px solid black;"></td><td style="border: 1px solid black;"></td><td style="border: 1px solid black;"></td><td style="border: 1px solid black;"></td><td style="border: 1px solid black;"></td></tr> <tr><td style="border: 1px solid black;"></td><td style="border: 1px solid black;"></td><td style="border: 1px solid black;"></td><td style="border: 1px solid black;"></td><td style="border: 1px solid black;"></td><td style="border: 1px solid black;"></td><td style="border: 1px solid black;"></td><td style="border: 1px solid black;"></td></tr> </table> <table style="width: 100%; border-collapse: collapse;"> <tr><td style="border: 1px solid black; width: 20px; height: 20px;"></td><td style="border: 1px solid black; width: 20px; height: 20px;"></td><td style="border: 1px solid black; width: 20px; height: 20px;"></td><td style="border: 1px solid black; width: 20px; height: 20px;"></td><td style="border: 1px solid black; width: 20px; height: 20px;"></td><td style="border: 1px solid black; width: 20px; height: 20px;"></td><td style="border: 1px solid black; width: 20px; height: 20px;"></td><td style="border: 1px solid black; width: 20px; height: 20px;"></td></tr> <tr><td style="border: 1px solid black; text-align: center;">2</td><td style="border: 1px solid black; text-align: center;">0</td><td style="border: 1px solid black; text-align: center;">0</td><td style="border: 1px solid black; text-align: center;">5</td><td style="border: 1px solid black; text-align: center;">0</td><td style="border: 1px solid black; text-align: center;">8</td><td style="border: 1px solid black; width: 20px; height: 20px;"></td><td style="border: 1px solid black; width: 20px; height: 20px;"></td></tr> <tr><td style="border: 1px solid black;"></td><td style="border: 1px solid black;"></td><td style="border: 1px solid black;"></td><td style="border: 1px solid black;"></td><td style="border: 1px solid black;"></td><td style="border: 1px solid black;"></td><td style="border: 1px solid black;"></td><td style="border: 1px solid black;"></td></tr> <tr><td style="border: 1px solid black;"></td><td style="border: 1px solid black;"></td><td style="border: 1px solid black;"></td><td style="border: 1px solid black;"></td><td style="border: 1px solid black;"></td><td style="border: 1px solid black;"></td><td style="border: 1px solid black;"></td><td style="border: 1px solid black;"></td></tr> <tr><td style="border: 1px solid black;"></td><td style="border: 1px solid black;"></td><td style="border: 1px solid black;"></td><td style="border: 1px solid black;"></td><td style="border: 1px solid black;"></td><td style="border: 1px solid black;"></td><td style="border: 1px solid black;"></td><td style="border: 1px solid black;"></td></tr> <tr><td style="border: 1px solid black;"></td><td style="border: 1px solid black;"></td><td style="border: 1px solid black;"></td><td style="border: 1px solid black;"></td><td style="border: 1px solid black;"></td><td style="border: 1px solid black;"></td><td style="border: 1px solid black;"></td><td style="border: 1px solid black;"></td></tr> <tr><td style="border: 1px solid black;"></td><td style="border: 1px solid black;"></td><td style="border: 1px solid black;"></td><td style="border: 1px solid black;"></td><td style="border: 1px solid black;"></td><td style="border: 1px solid black;"></td><td style="border: 1px solid black;"></td><td style="border: 1px solid black;"></td></tr> <tr><td style="border: 1px solid black;"></td><td style="border: 1px solid black;"></td><td style="border: 1px solid black;"></td><td style="border: 1px solid black;"></td><td style="border: 1px solid black;"></td><td style="border: 1px solid black;"></td><td style="border: 1px solid black;"></td><td style="border: 1px solid black;"></td></tr> <tr><td style="border: 1px solid black;"></td><td style="border: 1px solid black;"></td><td style="border: 1px solid black;"></td><td style="border: 1px solid black;"></td><td style="border: 1px solid black;"></td><td style="border: 1px solid black;"></td><td style="border: 1px solid black;"></td><td style="border: 1px solid black;"></td></tr> </table>									8	0	7	5	×							4																													2	0	0	5	0	8																																																											L01 L01  L01 L01	8.	<p>Впиши пропущенные числа.</p> <table style="width: 100%; border-collapse: collapse;"> <tr> <td style="border: 1px solid black; width: 100px; height: 30px;"></td> <td style="padding: 0 10px;">− 50 = 19 950</td> <td style="border-left: 1px solid black; padding: 0 10px;">500 +</td> <td style="border: 1px solid black; width: 100px; height: 30px;"></td> <td style="padding: 0 10px;">= 500 000</td> <td style="border-left: 1px solid black; padding: 0 10px;">:</td> <td style="border: 1px solid black; width: 100px; height: 30px;"></td> <td style="padding: 0 10px;">= 407</td> </tr> </table>		− 50 = 19 950	500 +		= 500 000	:		= 407	L02 L02 L02	9.	<p>Выяви правило составления ряда. Впиши последующее число.</p> <p>4 040, 2 020, 1 010, <span style="border: 1px solid black; display: inline-block; width: 50px; height: 20px; vertical-align: middle;"></span>.</p>	L02	10.	<p>Сравни. Поставь нужный знак сравнения (&lt;, =, &gt;).</p> <p>1 см ○ 100 мм                      1 мин ○ 100 сек</p> <p>1 км ○ 100 м                                      1 т ○ 100 кг</p>	L01 L01 L01 L01
<table style="width: 100%; border-collapse: collapse;"> <tr><td style="border: 1px solid black; width: 20px; height: 20px;"></td><td style="border: 1px solid black; width: 20px; height: 20px;"></td><td style="border: 1px solid black; width: 20px; height: 20px;"></td><td style="border: 1px solid black; width: 20px; height: 20px;"></td><td style="border: 1px solid black; width: 20px; height: 20px;"></td><td style="border: 1px solid black; width: 20px; height: 20px;"></td><td style="border: 1px solid black; width: 20px; height: 20px;"></td><td style="border: 1px solid black; width: 20px; height: 20px;"></td></tr> <tr><td style="border: 1px solid black; text-align: center;">7</td><td style="border: 1px solid black; text-align: center;">9</td><td style="border: 1px solid black; text-align: center;">6</td><td style="border: 1px solid black; text-align: center;">5</td><td style="border: 1px solid black; text-align: center;">8</td><td style="border: 1px solid black; text-align: center;">+</td><td style="border: 1px solid black; width: 20px; height: 20px;"></td><td style="border: 1px solid black; width: 20px; height: 20px;"></td></tr> <tr><td style="border: 1px solid black; text-align: center;">2</td><td style="border: 1px solid black; text-align: center;">0</td><td style="border: 1px solid black; text-align: center;">3</td><td style="border: 1px solid black; text-align: center;">5</td><td style="border: 1px solid black; text-align: center;">7</td><td style="border: 1px solid black;"></td><td style="border: 1px solid black;"></td><td style="border: 1px solid black;"></td></tr> <tr><td style="border: 1px solid black;"></td><td style="border: 1px solid black;"></td><td style="border: 1px solid black;"></td><td style="border: 1px solid black;"></td><td style="border: 1px solid black;"></td><td style="border: 1px solid black;"></td><td style="border: 1px solid black;"></td><td style="border: 1px solid black;"></td></tr> <tr><td style="border: 1px solid black;"></td><td style="border: 1px solid black;"></td><td style="border: 1px solid black;"></td><td style="border: 1px solid black;"></td><td style="border: 1px solid black;"></td><td style="border: 1px solid black;"></td><td style="border: 1px solid black;"></td><td style="border: 1px solid black;"></td></tr> </table> <table style="width: 100%; border-collapse: collapse;"> <tr><td style="border: 1px solid black; width: 20px; height: 20px;"></td><td style="border: 1px solid black; width: 20px; height: 20px;"></td><td style="border: 1px solid black; width: 20px; height: 20px;"></td><td style="border: 1px solid black; width: 20px; height: 20px;"></td><td style="border: 1px solid black; width: 20px; height: 20px;"></td><td style="border: 1px solid black; width: 20px; height: 20px;"></td><td style="border: 1px solid black; width: 20px; height: 20px;"></td><td style="border: 1px solid black; width: 20px; height: 20px;"></td></tr> <tr><td style="border: 1px solid black; text-align: center;">1</td><td style="border: 1px solid black; text-align: center;">0</td><td style="border: 1px solid black; text-align: center;">1</td><td style="border: 1px solid black; text-align: center;">0</td><td style="border: 1px solid black; text-align: center;">0</td><td style="border: 1px solid black; text-align: center;">−</td><td style="border: 1px solid black; width: 20px; height: 20px;"></td><td style="border: 1px solid black; width: 20px; height: 20px;"></td></tr> <tr><td style="border: 1px solid black; text-align: center;">9</td><td style="border: 1px solid black; text-align: center;">5</td><td style="border: 1px solid black; text-align: center;">0</td><td style="border: 1px solid black; text-align: center;">3</td><td style="border: 1px solid black;"></td><td style="border: 1px solid black;"></td><td style="border: 1px solid black;"></td><td style="border: 1px solid black;"></td></tr> <tr><td style="border: 1px solid black;"></td><td style="border: 1px solid black;"></td><td style="border: 1px solid black;"></td><td style="border: 1px solid black;"></td><td style="border: 1px solid black;"></td><td style="border: 1px solid black;"></td><td style="border: 1px solid black;"></td><td style="border: 1px solid black;"></td></tr> <tr><td style="border: 1px solid black;"></td><td style="border: 1px solid black;"></td><td style="border: 1px solid black;"></td><td style="border: 1px solid black;"></td><td style="border: 1px solid black;"></td><td style="border: 1px solid black;"></td><td style="border: 1px solid black;"></td><td style="border: 1px solid black;"></td></tr> </table>									7	9	6	5	8	+			2	0	3	5	7																												1	0	1	0	0	−			9	5	0	3																					<table style="width: 100%; border-collapse: collapse;"> <tr><td style="border: 1px solid black; width: 20px; height: 20px;"></td><td style="border: 1px solid black; width: 20px; height: 20px;"></td><td style="border: 1px solid black; width: 20px; height: 20px;"></td><td style="border: 1px solid black; width: 20px; height: 20px;"></td><td style="border: 1px solid black; width: 20px; height: 20px;"></td><td style="border: 1px solid black; width: 20px; height: 20px;"></td><td style="border: 1px solid black; width: 20px; height: 20px;"></td><td style="border: 1px solid black; width: 20px; height: 20px;"></td></tr> <tr><td style="border: 1px solid black; text-align: center;">8</td><td style="border: 1px solid black; text-align: center;">0</td><td style="border: 1px solid black; text-align: center;">7</td><td style="border: 1px solid black; text-align: center;">5</td><td style="border: 1px solid black; text-align: center;">×</td><td style="border: 1px solid black; width: 20px; height: 20px;"></td><td style="border: 1px solid black; width: 20px; height: 20px;"></td><td style="border: 1px solid black; width: 20px; height: 20px;"></td></tr> <tr><td style="border: 1px solid black;"></td><td style="border: 1px solid black;"></td><td style="border: 1px solid black;"></td><td style="border: 1px solid black; text-align: center;">4</td><td style="border: 1px solid black;"></td><td style="border: 1px solid black;"></td><td style="border: 1px solid black;"></td><td style="border: 1px solid black;"></td></tr> <tr><td style="border: 1px solid black;"></td><td style="border: 1px solid black;"></td><td style="border: 1px solid black;"></td><td style="border: 1px solid black;"></td><td style="border: 1px solid black;"></td><td style="border: 1px solid black;"></td><td style="border: 1px solid black;"></td><td style="border: 1px solid black;"></td></tr> <tr><td style="border: 1px solid black;"></td><td style="border: 1px solid black;"></td><td style="border: 1px solid black;"></td><td style="border: 1px solid black;"></td><td style="border: 1px solid black;"></td><td style="border: 1px solid black;"></td><td style="border: 1px solid black;"></td><td style="border: 1px solid black;"></td></tr> </table> <table style="width: 100%; border-collapse: collapse;"> <tr><td style="border: 1px solid black; width: 20px; height: 20px;"></td><td style="border: 1px solid black; width: 20px; height: 20px;"></td><td style="border: 1px solid black; width: 20px; height: 20px;"></td><td style="border: 1px solid black; width: 20px; height: 20px;"></td><td style="border: 1px solid black; width: 20px; height: 20px;"></td><td style="border: 1px solid black; width: 20px; height: 20px;"></td><td style="border: 1px solid black; width: 20px; height: 20px;"></td><td style="border: 1px solid black; width: 20px; height: 20px;"></td></tr> <tr><td style="border: 1px solid black; text-align: center;">2</td><td style="border: 1px solid black; text-align: center;">0</td><td style="border: 1px solid black; text-align: center;">0</td><td style="border: 1px solid black; text-align: center;">5</td><td style="border: 1px solid black; text-align: center;">0</td><td style="border: 1px solid black; text-align: center;">8</td><td style="border: 1px solid black; width: 20px; height: 20px;"></td><td style="border: 1px solid black; width: 20px; height: 20px;"></td></tr> <tr><td style="border: 1px solid black;"></td><td style="border: 1px solid black;"></td><td style="border: 1px solid black;"></td><td style="border: 1px solid black;"></td><td style="border: 1px solid black;"></td><td style="border: 1px solid black;"></td><td style="border: 1px solid black;"></td><td style="border: 1px solid black;"></td></tr> <tr><td style="border: 1px solid black;"></td><td style="border: 1px solid black;"></td><td style="border: 1px solid black;"></td><td style="border: 1px solid black;"></td><td style="border: 1px solid black;"></td><td style="border: 1px solid black;"></td><td style="border: 1px solid black;"></td><td style="border: 1px solid black;"></td></tr> <tr><td style="border: 1px solid black;"></td><td style="border: 1px solid black;"></td><td style="border: 1px solid black;"></td><td style="border: 1px solid black;"></td><td style="border: 1px solid black;"></td><td style="border: 1px solid black;"></td><td style="border: 1px solid black;"></td><td style="border: 1px solid black;"></td></tr> <tr><td style="border: 1px solid black;"></td><td style="border: 1px solid black;"></td><td style="border: 1px solid black;"></td><td style="border: 1px solid black;"></td><td style="border: 1px solid black;"></td><td style="border: 1px solid black;"></td><td style="border: 1px solid black;"></td><td style="border: 1px solid black;"></td></tr> <tr><td style="border: 1px solid black;"></td><td style="border: 1px solid black;"></td><td style="border: 1px solid black;"></td><td style="border: 1px solid black;"></td><td style="border: 1px solid black;"></td><td style="border: 1px solid black;"></td><td style="border: 1px solid black;"></td><td style="border: 1px solid black;"></td></tr> <tr><td style="border: 1px solid black;"></td><td style="border: 1px solid black;"></td><td style="border: 1px solid black;"></td><td style="border: 1px solid black;"></td><td style="border: 1px solid black;"></td><td style="border: 1px solid black;"></td><td style="border: 1px solid black;"></td><td style="border: 1px solid black;"></td></tr> <tr><td style="border: 1px solid black;"></td><td style="border: 1px solid black;"></td><td style="border: 1px solid black;"></td><td style="border: 1px solid black;"></td><td style="border: 1px solid black;"></td><td style="border: 1px solid black;"></td><td style="border: 1px solid black;"></td><td style="border: 1px solid black;"></td></tr> </table>									8	0	7	5	×							4																													2	0	0	5	0	8																																																											L01 L01  L01 L01																			
7	9	6	5	8	+																																																																																																																																																																																																																
2	0	3	5	7																																																																																																																																																																																																																	
1	0	1	0	0	−																																																																																																																																																																																																																
9	5	0	3																																																																																																																																																																																																																		
8	0	7	5	×																																																																																																																																																																																																																	
			4																																																																																																																																																																																																																		
2	0	0	5	0	8																																																																																																																																																																																																																
8.	<p>Впиши пропущенные числа.</p> <table style="width: 100%; border-collapse: collapse;"> <tr> <td style="border: 1px solid black; width: 100px; height: 30px;"></td> <td style="padding: 0 10px;">− 50 = 19 950</td> <td style="border-left: 1px solid black; padding: 0 10px;">500 +</td> <td style="border: 1px solid black; width: 100px; height: 30px;"></td> <td style="padding: 0 10px;">= 500 000</td> <td style="border-left: 1px solid black; padding: 0 10px;">:</td> <td style="border: 1px solid black; width: 100px; height: 30px;"></td> <td style="padding: 0 10px;">= 407</td> </tr> </table>		− 50 = 19 950	500 +		= 500 000	:		= 407	L02 L02 L02																																																																																																																																																																																																											
	− 50 = 19 950	500 +		= 500 000	:		= 407																																																																																																																																																																																																														
9.	<p>Выяви правило составления ряда. Впиши последующее число.</p> <p>4 040, 2 020, 1 010, <span style="border: 1px solid black; display: inline-block; width: 50px; height: 20px; vertical-align: middle;"></span>.</p>	L02																																																																																																																																																																																																																			
10.	<p>Сравни. Поставь нужный знак сравнения (&lt;, =, &gt;).</p> <p>1 см ○ 100 мм                      1 мин ○ 100 сек</p> <p>1 км ○ 100 м                                      1 т ○ 100 кг</p>	L01 L01 L01 L01																																																																																																																																																																																																																			

